
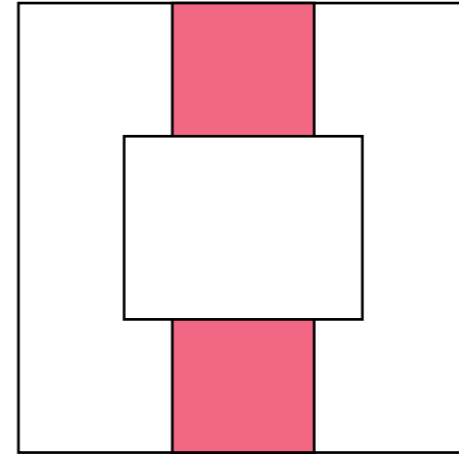


# DÜŞÜNME BECERİLERİNİ GELİŞTİRME ETKİNLİKLERİ

1

GÖRSEL VE İŞİTSEL ALGI







Yandaki bütün içerisindeki boşluğu aşağıdaki kutulardan hangisi tamamlar? İşaretle.




1




2



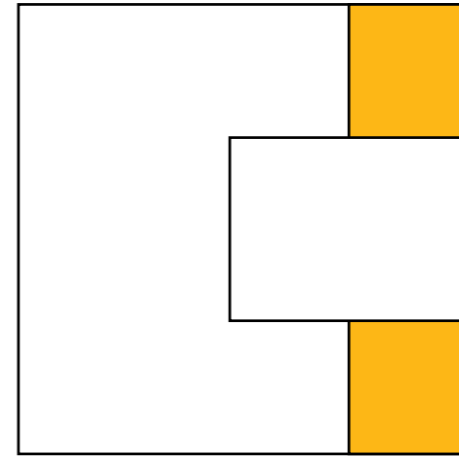

3



4



5



Yandaki bütün içerisindeki boşluğu aşağıdaki kutulardan hangisi tamamlar? İşaretle.



1



2



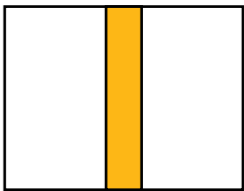
3




4

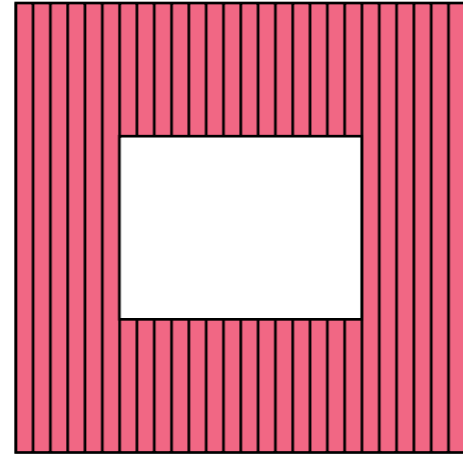


5





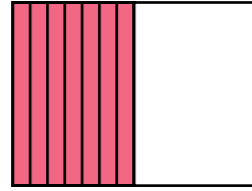
Yandaki bütün içerisindeki boşluğu aşağıdaki kutulardan hangisi tamamlar? İşaretle.




1



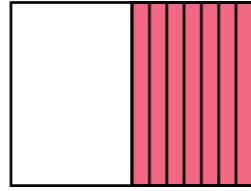
2




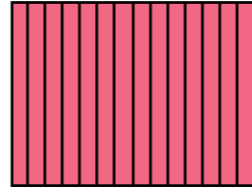
3




4




5




Yandaki bütün içerisindeki boşluğu aşağıdaki kutulardan hangisi tamamlar? İşaretle.



1




2




3



4



5



Karşılıklı olarak verilen şekil gruplarından aynı olanlara "+" işareti, farklı olanlara ise "-" işareti koy.



1



2



3



4



5



6




7



8






Karşılıklı olarak verilen ses ve rakam gruplarından aynı olanlara "+" işareti, farklı olanlara ise "-" işareti koy.

1	1	6	3		1	6	3
2	D	R	T		D	R	T
3	2	4	7		2	7	4
4	8	9	3		8	3	9
5	R	F	S		R	F	S
6	7	6	5		7	5	6
7	K	L	3		K	3	L
8	2	1	0		2	1	0
9	A	D	B		A	B	B
10	4	2	6		4	6	2
11	H	M	N		H	M	M
12	0	L	2		0	L	2
13	T	C	Z		T	C	2
14	P	7	F		P	7	F

Karışık çizgiler arasında gizlenmiş **daiireleri** bul ve boya.



Karışık çizgiler arasında gizlenmiş **kareleri** bul ve boya.

