

GELECEĞİN BİLİM İNSANLARI İÇİN

2. SINIF

DAHİ ÇOCUK DENEME

BİLSEM ZEKA KİTABI



bilsEmC².com

Adı Soyadı:

Okulu:

Sınıfı:

Numarası:

ALTIN NOKTA YAYINEVİ
İZMİR-2018

Copyright©ALTIN NOKTA

ISBN 978-605-2265-05-5

MATEMATİK VE ZEKA KİTAPLARI
2. Sınıf Dahi Çocuk Deneme Bilsen Zeka Kitabı

Bu kitabın her hakkı saklıdır.

Tüm hakları **ALTIN NOKTA YAYINEVİ**ne aittir.

Kısmen de olsa alıntı yapılamaz. Metinler, kitabı yayımlayan kurumun önceden izni olmaksızın elektronik, mekanik, fotokopi ya da herhangi bir kayıt sistemiyle çoğaltılamaz, yayımlanamaz. Kitapta yer alan oyun, bulmaca, soru, metin ve resimlerin sorumluluğu yazarına/yazarlarına aittir.

Genel Yayın Yönetmeni
Halil İ. AKÇETİN

Yayın Editörü
Leyla AKÇETİN

Dizgi & Kapak
Altın Nokta Grafik

Yayın - Dağıtım

Altın Nokta Basım Yayın Dağıtım

859 Sk. No:1/Z-4 Saray İş Hanı C-Blok Konak / İZMİR

Tel-Faks : 0 (232) 441 25 95 - 0 551 402 79 20

www.nartest.com.tr - www.altinnokta.com.tr
www.nokta2000.com - www.kitapana.com.tr
www.bilimselkitaplar.net - www.bilsemkitaplari.com
www.bilsemsinavlari.com

nartest@nartest.com.tr - altinnokta@altinnokta.com.tr
nokta@nokta2000.com - kitapana@kitapana.com.tr
destek@bilimselkitaplar.net - destek@bilsemkitaplari.com
destek@bilsemsinavlari.com

Basım

Birleşik Matbaacılık


Buca OSB Mah. BEGOS 2. Bölge 3/20 Sk. No:17 K:-3 Buca / İZMİR


Tel: 0 232 433 68 66 Sertifika No: 14892

Ocak – 2018

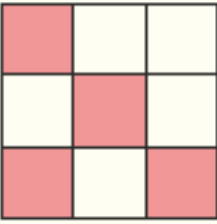
Birinci Basım

1)

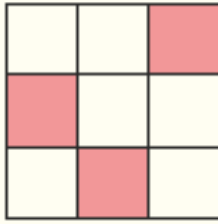


Yukarıdaki tabloda  şeklinin bulunduğu kareler hangi seçenekte doğru olarak verilmiştir?

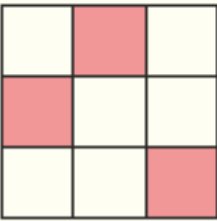
A)



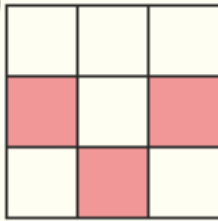
B)



C)



D)



ALTIN NOKTA YAYINEVİ

2)

Aşağıdaki şekillerden hangisi diğerlerine göre farklıdır?

A)



B)



C)



D)



3)

Aşağıdaki canlılardan hangisi hareket kabiliyetine göre, diğerlerinden farklıdır?

A)



B)



C)



D)



4)



Aşağıdakilerden hangisi yukarıda verilen canlının gölgesidir?

- A) B) C) D)

5)



Hangi seçenekteki gölge, yukarıdaki kedilere ait değildir?

- A) B) C) D)

6)

NAZEN → ▲ ■ ● ★ ▲

BÜŞRA → ✱ □ ❁ ○ ■

arasındaki ilişki ZEBRA ile aşağıdakilerin hangisi arasında olabilir?

- A) ● ★ ○ ✱ ■
B) ● ○ ★ ■ ✱
C) ● ★ ✱ ○ ■
D) ■ ★ ✱ ● ○

ALTIN NOKTA YAMNEVİ

7)

SEMA → 3824

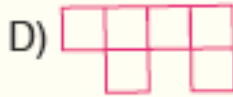
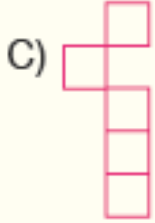
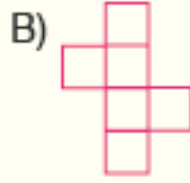
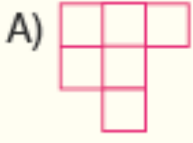
KİRA → 5764

olduğuna göre KERİM aşağıdakilerden hangisidir?

- A) 58672 B) 58762
C) 56782 D) 58627

8)

Aşağıdakilerden, hangisi küp açılımıdır?



9)

ATKI - BERE
KABAN - ÇİZME

Verilen sözcük grubu ile ortak özellik gösteren sözcük aşağıdakilerden hangisinde verilmiştir?



Eldiven



Etek




Gömlek



Pantolon

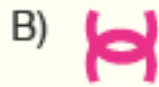
Aşağıdaki sorularda resimler arasındaki ilişkilere uygun olarak "?" yerine gelmesi gerekenleri seçeneklerde bulunuz.

10)



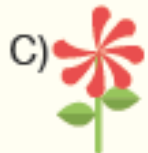

11)

A	V	☆
C	∩	?



12)

		?



13)


		?



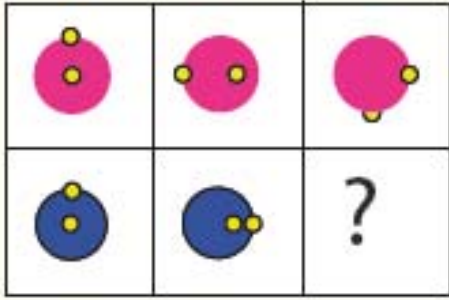
ALTIN NOKTA YAMINEVI

14)

		?




15)




- A)
- B)
- C)
- D)

16)




- A)
- B)
- C)
- D)

17)



- A)
- B)
- C)
- D)


18)



- A)
- B)
- C)
- D)


ALTIN NOKTA YAYINEVI

19)



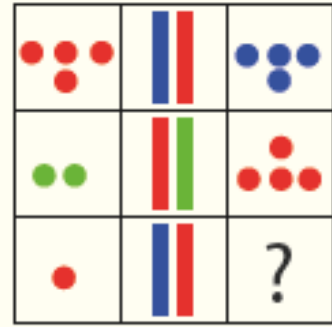
- A)
- B)
- C)
- D)

20)



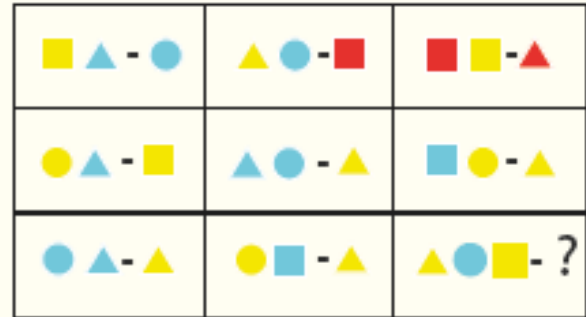
- A)
- B)
- C)
- D)

21)



- A)
- B)
- C)
- D)

22)



- A)
- B)
- C)
- D)

23)

- A)
- B)
- C)
- D)

24)

- A)
- B)
- C)
- D)

25)

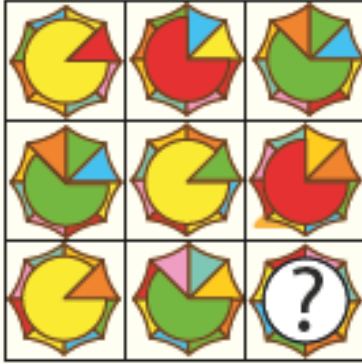
- A)
- B)
- C)
- D)

26)



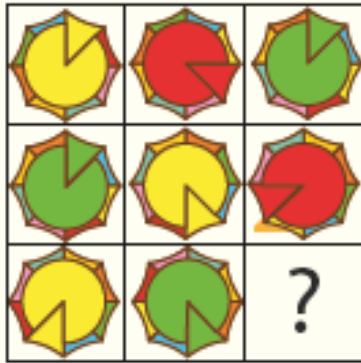
- A)
- B)
- C)
- D)

27)



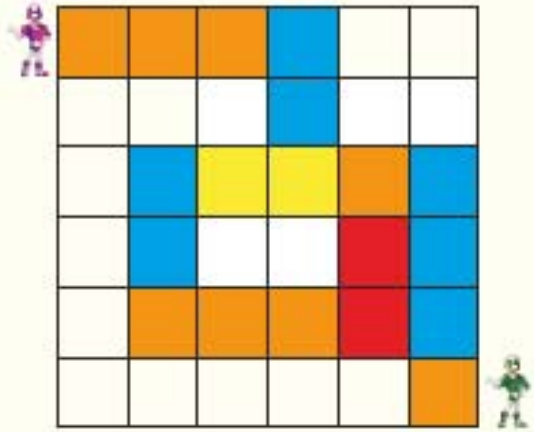
- A)
- B)
- C)
- D)

28)



- A)
- B)
- C)
- D)

29)



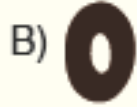
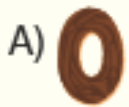
Kahramanımız, renkleri takip ederek kıyafetini değiştirmiştir. **Mavi** renk aşağıdakilerden hangi yönü ifade eder?

- A)
- B)
- C)
- D)

30)






31)



32)



33)




ALTIN NOKTA YAYINEVI

34)



- A)
- B)
- C)
- D)
- E)
- F)


35)









- A)
- B)
- C)
- D)
- E)
- F)


ALTIN NOKTA YAMINEVI







36)



- A)  B) 
- C)  D) 
- E)  F) 


37)



- A)  B) 
- C)  D) 
- E)  F) 


ALTIN NOKTA YAYINEVI

38)




ALTIN NOKTA YAMINEVI

39)

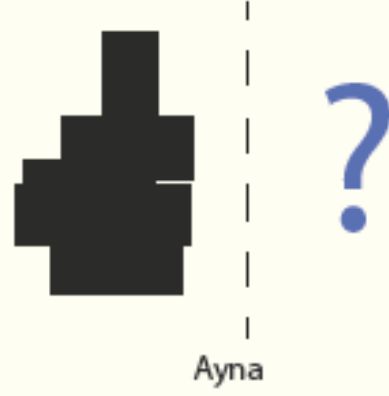


40)



- A)
- B)
- C)
- D)
- E)
- F)

41)



- A)
- B)
- C)
- D)
- E)
- F)

ALTIN NOKTA YAYINEVI